

1. (a) Define the definition of the mean square error of a point estimator  $\hat{\theta}$  of  $\theta$ ,  $MSE(\hat{\theta})=?$  (5%)
- (b) Show that  $MSE(\hat{\theta})=V(\hat{\theta})+B^2$ , where  $B^2=E(\hat{\theta})-\theta$  (5%)
- (c) If  $\hat{\theta}$  is a MVUE (a Minimum Variance Unbiased Estimator) of  $\theta$ . What property will have in  $MSE(\hat{\theta})?$  (5%)
2. In making bids on building projects, KUAN TAO Builders, Inc., (冠德建設) assumes construction workers are idle no more than 15% of the time. For a normal 8-hour shift, this means that the mean idle time per worker should be 72 minutes or less per day. A sample of 30 construction workers provided a mean idle time of 80 minutes per day. The sample standard deviation was 20 minutes. Suppose a hypothesis test to be designed to test the validity of the company's assumption.
- (a) What is the P-value associated with the sample result? (5%)
- (b) Using a 0.05 level of significance and the P-value, test the hypothesis  $H_0: \mu \leq 72$ . What is your conclusion? (5%)
- (c) What is the probability of making a Type II error when the population mean idle time is 80 minutes? and sketch the OC curve for this problem? (5%)
- (d) If  $H_0: \mu = 72$ ,  $H_a: \mu = 80$ , and  $\alpha = .05$ ,  $\beta = .10$ . Find  $n = ?$  (5%)
3. A stimulus-response experiment involving three treatments was laid out in a randomized block design using four subjects. The response was the length of time to reaction measured in seconds. The data arranged in blocks, are shown in below figure. The treatment number is circled and shown above each observation. Do the data present sufficient evidence to indicate a difference in the mean responses for stimuli (treatments)? Subjects? Use  $\alpha = .05$  for each test. Construct a 95% confidence interval for the difference between the mean responses for treatments 1 and 2. (15%)

Subjects

1	2	3	4
① 1.7	③ 2.1	① 0.1	② 2.2
③ 2.3	① 1.5	② 2.3	① 0.6
② 3.4	② 2.6	③ 0.8	③ 1.6

4. (10%) A line from  $a$  to  $b$  has midpoint  $c$ . A point is chosen at random on the line and marked  $x$ . Find the probability that the line segments  $ax$ ,  $bx$ , and  $ac$  can be jointed to form a triangle.
5. (10%) The proportion of time  $X$  that an industrial robot is in operation during a 40-hour week is a random variable with probability density function

$$f(x) = \begin{cases} 2x & 0 \leq x \leq 1 \\ 0 & \text{elsewhere} \end{cases}$$

For the robot under study the profit  $Y$  for a week is given by  $y = 200X - 60$ . Find an interval in which the profit should lie for at least 75% of the weeks that the robot is in use.

6. (16%) Describe the following terms. (List the associated formula, if necessary.)
- (1) (4%) Bayes Estimator
  - (2) (4%) Completely Randomized Design
  - (3) (4%) Factorial Experiment
  - (4) (4%) Deterministic Model and Probabilistic Model
7. (14%) Suppose that you fit the model

$$Y = \beta_0 + \beta_1 x_1 + \beta_2 x_2 + \beta_3 x_1 x_2 + \beta_4 x_1^2 + \beta_5 x_2^2 + \varepsilon$$

to  $n = 30$  data points, and the sum of squared errors (SSE) and the multiple coefficient of determination  $R^2$  are

$$\text{SSE} = 0.37, \quad R^2 = 0.89,$$

respectively. Answer the following problems.

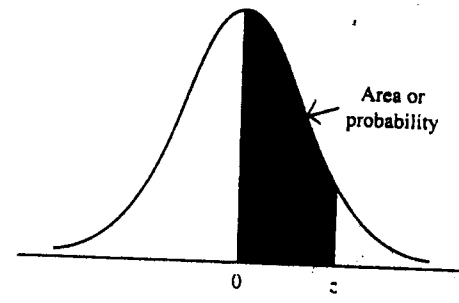
- (1) (4%) Do the values of SSE and  $R^2$  suggest that the model provide a good fit to the data? Explain.
- (2) (10%) Determine the analysis of variance for this model fitting. Is the model of any use in predicting  $y$ ? Test the null hypothesis that  $E(Y) = \beta_0$ . Use  $\alpha = 0.05$ .

$$\text{NOTE: } F_{0.05}(24,5) = 4.53, F_{0.05}(5,24) = 2.62, F_{0.05}(5,25) = 2.60,$$

$$t_{0.05}(25) = 1.708, t_{0.05}(24) = 1.711, t_{0.025}(25) = 2.060, t_{0.025}(24) = 2.064$$

附表 1

TABLE  
Standard Normal  
Distribution

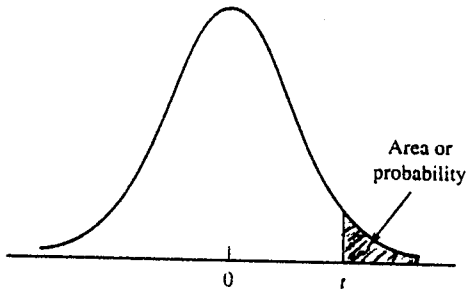


Entries in the table give the area under the curve between the mean and z standard deviations above the mean. For example, for z=1.25 the area under the curve between the mean and z is .3944.

z	.00	.01	.02	.03	.04	.05	.06	.07	.08	.09
.0	.0000	.0040	.0080	.0120	.0160	.0199	.0239	.0279	.0319	.0359
.1	.0398	.0438	.0478	.0517	.0557	.0596	.0636	.0675	.0714	.0753
.2	.0793	.0832	.0871	.0910	.0948	.0987	.1026	.1064	.1103	.1141
.3	.1179	.1217	.1255	.1293	.1331	.1368	.1406	.1443	.1480	.1517
.4	.1554	.1591	.1628	.1664	.1700	.1736	.1772	.1808	.1844	.1879
.5	.1915	.1950	.1985	.2019	.2054	.2088	.2123	.2157	.2190	.2224
.6	.2257	.2291	.2324	.2357	.2389	.2422	.2454	.2486	.2518	.2549
.7	.2580	.2612	.2642	.2673	.2704	.2734	.2764	.2794	.2823	.2852
.8	.2881	.2910	.2939	.2967	.2995	.3023	.3051	.3078	.3106	.3133
.9	.3159	.3186	.3212	.3238	.3264	.3289	.3315	.3340	.3365	.3389
1.0	.3413	.3438	.3461	.3485	.3508	.3531	.3554	.3577	.3599	.3621
1.1	.3643	.3665	.3686	.3708	.3729	.3749	.3770	.3790	.3810	.3830
1.2	.3849	.3869	.3888	.3907	.3925	.3944	.3962	.3980	.3997	.4015
1.3	.4032	.4049	.4066	.4082	.4099	.4115	.4131	.4147	.4162	.4177
1.4	.4192	.4207	.4222	.4236	.4251	.4265	.4279	.4292	.4306	.4319
1.5	.4332	.4345	.4357	.4370	.4382	.4394	.4406	.4418	.4429	.4441
1.6	.4452	.4463	.4474	.4484	.4495	.4505	.4515	.4525	.4535	.4545
1.7	.4554	.4564	.4573	.4582	.4591	.4599	.4608	.4616	.4625	.4633
1.8	.4641	.4649	.4656	.4664	.4671	.4678	.4686	.4693	.4699	.4706
1.9	.4713	.4719	.4726	.4732	.4738	.4744	.4750	.4756	.4761	.4767
2.0	.4772	.4778	.4783	.4788	.4793	.4798	.4803	.4808	.4812	.4817
2.1	.4821	.4826	.4830	.4834	.4838	.4842	.4846	.4850	.4854	.4857
2.2	.4861	.4864	.4868	.4871	.4875	.4878	.4881	.4884	.4887	.4890
2.3	.4893	.4896	.4898	.4901	.4904	.4906	.4909	.4911	.4913	.4916
2.4	.4918	.4920	.4922	.4925	.4927	.4929	.4931	.4932	.4934	.4936
2.5	.4938	.4940	.4941	.4943	.4945	.4946	.4948	.4949	.4951	.4952
2.6	.4953	.4955	.4956	.4957	.4959	.4960	.4961	.4962	.4963	.4964
2.7	.4965	.4966	.4967	.4968	.4969	.4970	.4971	.4972	.4973	.4974
2.8	.4974	.4975	.4976	.4977	.4977	.4978	.4979	.4979	.4980	.4981
2.9	.4981	.4982	.4982	.4983	.4984	.4984	.4985	.4985	.4986	.4986
3.0	.4986	.4987	.4987	.4988	.4988	.4989	.4989	.4989	.4990	.4990

附表 2

TABLE  
t Distribution

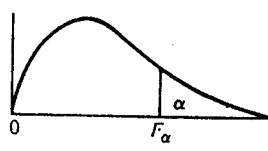


Entries in the table give  $t$  values for an area or probability in the upper tail of the  $t$  distribution. For example, with 10 degrees of freedom and a .05 area in the upper tail,  $t_{.05}$  1.812.

Degrees of Freedom	Area in Upper Tail				
	.10	.05	.025	.01	.005
1	3.078	6.314	12.706	31.821	63.657
2	1.886	2.920	4.303	6.965	9.925
3	1.638	2.353	3.182	4.541	5.841
4	1.533	2.132	2.776	3.747	4.604
5	1.476	2.015	2.571	3.365	4.032
6	1.440	1.943	2.447	3.143	3.707
7	1.415	1.895	2.365	2.998	3.499
8	1.397	1.860	2.306	2.896	3.355
9	1.383	1.833	2.262	2.821	3.250
10	1.372	1.812	2.228	2.764	3.169
11	1.363	1.796	2.201	2.718	3.106
12	1.356	1.782	2.179	2.681	3.055
13	1.350	1.771	2.160	2.650	3.012
14	1.345	1.761	2.145	2.624	2.977
15	1.341	1.753	2.131	2.602	2.947
16	1.337	1.746	2.120	2.583	2.921
17	1.333	1.740	2.110	2.567	2.898
18	1.330	1.734	2.101	2.552	2.878
19	1.328	1.729	2.093	2.539	2.861
20	1.325	1.725	2.086	2.528	2.845
21	1.323	1.721	2.080	2.518	2.831
22	1.321	1.717	2.074	2.508	2.819
23	1.319	1.714	2.069	2.500	2.807
24	1.318	1.711	2.064	2.492	2.797
25	1.316	1.708	2.060	2.485	2.787
26	1.315	1.706	2.056	2.479	2.779
27	1.314	1.703	2.052	2.473	2.771
28	1.313	1.701	2.048	2.467	2.763
29	1.311	1.699	2.045	2.462	2.756
30	1.310	1.697	2.042	2.457	2.750
40	1.303	1.684	2.021	2.423	2.704
60	1.296	1.671	2.000	2.390	2.660
120	1.289	1.658	1.980	2.358	2.617
$\infty$	1.282	1.645	1.960	2.326	2.576

附表 3

Table 17 Percentage points of the F distributions



Denominator d.f.	Numerator d.f.									
	$\alpha$	1	2	3	4	5	6	7	8	9
1	.100	39.86	49.50	53.59	55.83	57.24	58.20	58.91	59.44	59.86
	.050	161.4	199.5	215.7	224.6	230.2	234.0	236.8	238.9	240.5
	.025	647.8	799.5	864.2	899.6	921.8	937.1	948.2	956.7	963.3
	.010	4052	4999.5	5403	5625	5764	5859	5928	5982	6022
	.005	16211	20000	21615	22500	23056	23437	23715	23925	24091
2	.100	8.53	9.00	9.16	9.24	9.29	9.33	9.35	9.37	9.38
	.050	18.51	19.00	19.16	19.25	19.30	19.33	19.35	19.37	19.38
	.025	38.51	39.00	39.17	39.25	39.30	39.33	39.36	39.37	39.39
	.010	98.50	99.00	99.17	99.25	99.30	99.33	99.36	99.37	99.39
	.005	198.5	199.0	199.2	199.2	199.3	199.3	199.4	199.4	199.4
3	.100	5.54	5.46	5.39	5.34	5.31	5.28	5.27	5.25	5.24
	.050	10.13	9.55	9.28	9.12	9.01	8.94	8.89	8.85	8.81
	.025	17.44	16.04	15.44	15.10	14.88	14.73	14.62	14.54	14.47
	.010	34.12	30.82	29.46	28.71	28.24	27.91	27.67	27.49	27.35
	.005	55.55	49.80	47.47	46.19	45.39	44.84	44.43	44.13	43.88
4	.100	4.54	4.32	4.19	4.11	4.05	4.01	3.98	3.95	3.94
	.050	7.71	6.94	6.59	6.39	6.26	6.16	6.09	6.04	6.00
	.025	12.22	10.65	9.98	9.60	9.36	9.20	9.07	8.98	8.90
	.010	21.20	18.00	16.69	15.98	15.52	15.21	14.98	14.80	14.66
	.005	31.33	26.28	24.26	23.15	22.46	21.97	21.62	21.35	21.14
5	.100	4.06	3.78	3.62	3.52	3.45	3.40	3.37	3.34	3.32
	.050	6.61	5.79	5.41	5.19	5.05	4.95	4.88	4.82	4.77
	.025	10.01	8.43	7.76	7.39	7.15	6.98	6.85	6.76	6.68
	.010	16.26	13.27	12.06	11.39	10.97	10.67	10.46	10.29	10.16
	.005	22.78	18.31	16.53	15.56	14.94	14.51	14.20	13.96	13.77
6	.100	3.78	3.46	3.29	3.18	3.11	3.05	3.01	2.98	2.96
	.050	5.99	5.14	4.76	4.53	4.39	4.28	4.21	4.15	4.10
	.025	8.81	7.26	6.60	6.23	5.99	5.82	5.70	5.60	5.52
	.010	13.75	10.92	9.78	9.15	8.75	8.47	8.26	8.10	7.98
	.005	18.63	14.54	12.92	12.03	11.46	11.07	10.79	10.57	10.39
7	.100	3.59	3.26	3.07	2.96	2.88	2.83	2.78	2.75	2.72
	.050	5.59	4.74	4.35	4.12	3.97	3.87	3.79	3.73	3.68
	.025	8.07	6.54	5.89	5.52	5.29	5.12	4.99	4.90	4.82
	.010	12.25	9.55	8.45	7.85	7.46	7.19	6.99	6.84	6.72
	.005	16.24	12.40	10.88	10.05	9.52	9.16	8.89	8.68	8.51