

本試題是否可以使用計算機： 可使用， 不可使用（請命題老師勾選）

考試日期：0302，節次：3

1. A bowl contains two red balls, two white balls, and fifth ball that is either red or white. Let  $p$  denote the probability of drawing a red ball from the bowl. We shall test the simple null hypothesis  $H_0: p = 3/5$  against the simple alternative hypothesis  $H_1: p = 2/5$ . Draw four balls at random from the bowl, one at a time and with replacement. Let  $X$  equal the number of red balls drawn.
- (a) Define a critical region  $C$  for this test in terms of  $X$ . (3%)
- (b) For the critical region  $C$  defined in part (a), find the values of  $\alpha$  (the probability of type I error) and  $\beta$  (the probability of type II error). (12%)
2. Assume that the birth weight in grams of a baby born in the United States is  $N(3200, 500^2)$ , boys and girls combined. Let  $X$  equal the weight of a baby girl who is born at home in Ottawa County and assume that the distribution of  $X$  is  $N(\mu_x, \sigma_x^2)$ .
- (a) Using 11 observations of  $X$ , give the test statistic and critical region for testing  $H_0: \mu_x = 3200$  against the alternative hypothesis  $H_1 = \mu_x > 3200$  (home-born babies are heavier) if  $\alpha = 0.05$ . (3%)
- (b) Calculate the value of the test statistic and give your conclusion using the following weights:  
3119 2657 3459 3629 3345 3629 3515 3856 3629 3345 3062 (3%)
- (c) What is the approximate  $p$ -value of the test? (3%)
- (d) Give the test statistic and critical region for testing  $H_0: \sigma_x^2 = 500^2$  against the alternative hypothesis  $H_1 = \sigma_x^2 < 500^2$  (less variation of weights of home-born babies) if  $\alpha = 0.01$ . (3%)
- (e) Calculate the value of your test statistic and state your conclusion. (3%)
- (f) What is the approximate  $p$ -value of this second test? (3%)
3. Let  $p$  equal the proportion of college students who favor a new policy for alcohol consumption on campus. How large a sample is required to estimate  $p$  so that with 90% confidence the maximum error of the estimate of  $p$  is 0.03 when the size of the student body is  $N = 2000$ ? (10%)

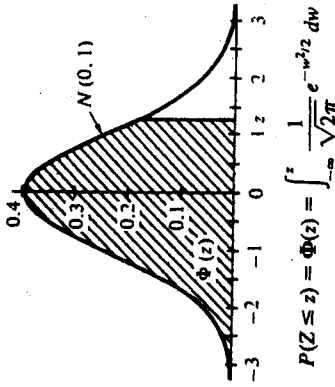
(背面仍有題目,請繼續作答)

4. The six numbers 1, 2, 3, 4, 5, and 6 are written, respectively, on six disks of the same size and placed in a hat. Two disks are drawn without replacement from the hat, and the numbers written on them are observed.
- (a) List all the possible outcomes for this experiment as pairs of numbers (order not important). (5%)
- (b) If each of the possible outcomes has equal probability, assign a value to the probability that the sum of the two numbers drawn is (i) 4 and (ii) between 5 and 7 inclusive. (10%)
5. You are a member of a class of 20 students. A bowl contains 20 chips, 1 blue and 19 red. Each student is to take 1 chip from the bowl without replacement. The student who draws the blue chip is guaranteed an A for the course.
- (a) If you have a choice of drawing first, fifth, or last, which position would you choose? Justify your choice using probability. (2%)
- (b) Suppose that the bowl contains 2 blue and 18 red chips. What position would you now choose? (3%)
6. Bowl A contains two red chips and two white chips; bowl B contains one red chip and three white chips; bowl C contains three red chips and one white chip. A bowl is selected at random (with equal probabilities), and one chip is taken at random from the bowl.
- (a) Compute the probability of selecting a white chip, say  $P(W)$ . (5%)
- (b) If the chip selected is white, compute the conditional probability that the other chips in the bowl contain at least one white chip. (10%)
7. Let  $X$  be the smaller outcome when a pair of four-sided dice is rolled.
- (a) Find the p.d.f. of  $X$ . (5%)
- (b) Find the mean, variance, and standard deviation of  $X$ . (5%)
8. The moment-generating function of  $X$  is  
$$M_X(t) = (1/4)(e^t + e^{2t} + e^{3t} + e^{4t});$$
  
the moment-generating function of  $Y$  is  
$$M_Y(t) = (1/3)(e^t + e^{2t} + e^{3t});$$
  
 $X$  and  $Y$  are independent random variables. Let  $W = X + Y$ .
- (a) Find the moment-generating function of  $W$ . (5%)
- (b) Give the p.d.f. of  $W$ . (7%)

本試題是否可以使用計算機： 可使用， 不可使用 (請命題老師勾選)

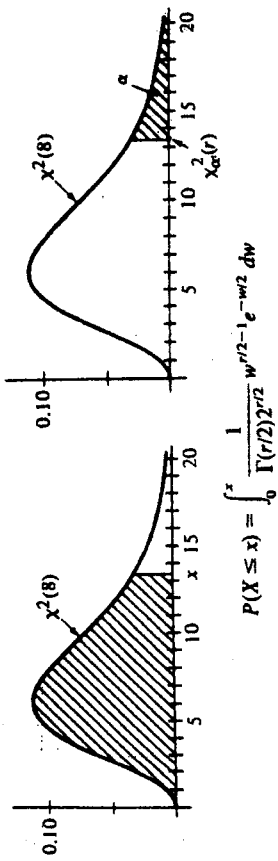
考試日期：0302，節次：3

The Normal Distribution



z	0.00	0.01	0.02	0.03	0.04	0.05	0.06	0.07	0.08	0.09
0.0	0.5000	0.5040	0.5080	0.5120	0.5160	0.5199	0.5239	0.5279	0.5319	0.5359
0.1	0.5398	0.5438	0.5478	0.5517	0.5557	0.5596	0.5636	0.5675	0.5714	0.5753
0.2	0.5793	0.5832	0.5871	0.5910	0.5948	0.5987	0.6026	0.6064	0.6103	0.6141
0.3	0.6179	0.6217	0.6255	0.6293	0.6331	0.6368	0.6406	0.6443	0.6480	0.6517
0.4	0.6554	0.6591	0.6628	0.6664	0.6700	0.6736	0.6772	0.6808	0.6844	0.6879
0.5	0.6915	0.6950	0.6985	0.7019	0.7054	0.7088	0.7123	0.7157	0.7190	0.7224
0.6	0.7257	0.7291	0.7324	0.7357	0.7389	0.7422	0.7454	0.7486	0.7517	0.7549
0.7	0.7580	0.7611	0.7642	0.7673	0.7703	0.7734	0.7764	0.7794	0.7823	0.7852
0.8	0.7881	0.7910	0.7939	0.7967	0.7995	0.8023	0.8051	0.8078	0.8106	0.8133
0.9	0.8159	0.8186	0.8212	0.8238	0.8264	0.8289	0.8315	0.8340	0.8365	0.8389
1.0	0.8413	0.8438	0.8461	0.8485	0.8508	0.8531	0.8554	0.8577	0.8599	0.8621
1.1	0.8643	0.8665	0.8686	0.8708	0.8729	0.8749	0.8770	0.8790	0.8810	0.8830
1.2	0.8849	0.8869	0.8888	0.8907	0.8925	0.8944	0.8962	0.8980	0.8997	0.9015
1.3	0.9032	0.9049	0.9066	0.9082	0.9099	0.9115	0.9131	0.9147	0.9162	0.9177
1.4	0.9192	0.9207	0.9222	0.9236	0.9251	0.9265	0.9279	0.9292	0.9306	0.9319
1.5	0.9332	0.9345	0.9357	0.9370	0.9382	0.9394	0.9406	0.9418	0.9429	0.9441
1.6	0.9452	0.9463	0.9474	0.9484	0.9495	0.9505	0.9515	0.9525	0.9535	0.9545
1.7	0.9554	0.9564	0.9573	0.9582	0.9591	0.9599	0.9608	0.9616	0.9625	0.9633
1.8	0.9641	0.9649	0.9656	0.9664	0.9671	0.9678	0.9686	0.9693	0.9699	0.9706
1.9	0.9713	0.9719	0.9726	0.9732	0.9738	0.9744	0.9750	0.9756	0.9761	0.9767
2.0	0.9772	0.9778	0.9783	0.9788	0.9793	0.9798	0.9803	0.9808	0.9812	0.9817
2.1	0.9821	0.9826	0.9830	0.9834	0.9838	0.9842	0.9846	0.9850	0.9854	0.9857
2.2	0.9861	0.9864	0.9868	0.9871	0.9875	0.9878	0.9881	0.9884	0.9887	0.9890
2.3	0.9893	0.9896	0.9898	0.9901	0.9904	0.9906	0.9909	0.9911	0.9913	0.9916
2.4	0.9918	0.9920	0.9922	0.9925	0.9927	0.9929	0.9931	0.9932	0.9934	0.9936
2.5	0.9938	0.9940	0.9941	0.9943	0.9945	0.9946	0.9948	0.9949	0.9951	0.9952
2.6	0.9953	0.9955	0.9956	0.9957	0.9959	0.9960	0.9961	0.9962	0.9963	0.9964
2.7	0.9965	0.9966	0.9967	0.9968	0.9969	0.9970	0.9971	0.9972	0.9973	0.9974
2.8	0.9974	0.9975	0.9976	0.9977	0.9977	0.9978	0.9979	0.9979	0.9980	0.9981
2.9	0.9981	0.9982	0.9982	0.9983	0.9984	0.9984	0.9985	0.9985	0.9986	0.9986
3.0	0.9987	0.9987	0.9987	0.9988	0.9988	0.9988	0.9989	0.9989	0.9990	0.9990
α	0.400	0.300	0.200	0.100	0.050	0.025	0.010	0.005	0.001	
z <sub>α</sub>	0.253	0.524	0.842	1.282	1.645	1.960	2.326	2.576	3.090	
z <sub>α/2</sub>	0.842	1.036	1.282	1.645	1.960	2.240	2.576	2.807	3.291	

The Chi-Square Distribution



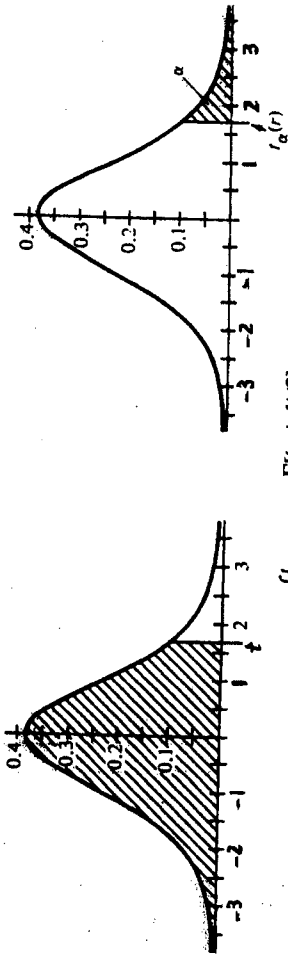
r	0.010	0.025	0.050	0.100	0.900	0.950	0.975	0.990
1	0.000	0.001	0.004	0.016	2.706	3.841	5.024	6.635
2	0.020	0.051	0.103	0.211	4.605	5.991	7.378	9.210
3	0.115	0.216	0.352	0.584	6.251	7.815	9.348	11.34
4	0.297	0.484	0.711	1.064	7.779	9.488	11.14	13.28
5	0.554	0.831	1.145	1.610	9.236	11.07	12.83	15.09
6	0.872	1.237	1.635	2.204	10.64	12.59	14.45	16.81
7	1.239	1.690	2.167	2.833	12.02	14.07	16.01	18.48
8	1.646	2.180	2.733	3.490	13.36	15.51	17.54	20.09
9	2.088	2.700	3.325	4.168	14.68	16.92	19.02	21.67
10	2.558	3.247	3.940	4.865	15.99	18.31	20.48	23.21
11	3.053	3.816	4.575	5.578	17.28	19.68	21.92	24.72
12	3.571	4.404	5.226	6.304	18.55	21.03	23.34	26.22
13	4.107	5.009	5.892	7.042	19.81	22.36	24.74	27.69
14	4.660	5.629	6.571	7.790	21.06	23.68	26.12	29.14
15	5.229	6.262	7.261	8.547	22.31	25.00	27.49	30.58
16	5.812	6.908	7.962	9.312	23.54	26.30	28.84	32.00
17	6.408	7.564	8.672	10.08	24.77	27.59	30.19	33.41
18	7.015	8.231	9.390	10.86	25.99	28.87	31.53	34.80
19	7.633	8.907	10.12	11.65	27.20	30.14	32.85	36.19
20	8.260	9.591	10.85	12.44	28.41	31.41	34.17	37.57
21	8.897	10.28	11.59	13.24	29.62	32.67	35.48	38.93
22	9.542	10.98	12.34	14.04	30.81	33.92	36.78	40.29
23	10.20	11.69	13.09	14.85	32.01	35.17	38.08	41.64
24	10.86	12.40	13.85	15.66	33.20	36.42	39.36	42.98
25	11.52	13.12	14.61	16.47	34.38	37.65	40.65	44.31
26	12.20	13.84	15.38	17.29	35.56	38.88	41.92	45.64
27	12.88	14.57	16.15	18.11	36.74	40.11	43.19	46.96
28	13.56	15.31	16.93	18.94	37.92	41.34	44.46	48.28
29	14.26	16.05	17.71	19.77	39.09	42.56	45.72	49.59
30	14.95	16.79	18.49	20.60	40.26	43.77	46.98	50.89
40	22.16	24.43	26.51	29.05	51.80	55.76	59.34	63.69
50	29.71	32.36	34.76	37.69	63.17	67.50	71.42	76.15
60	37.48	40.48	43.19	46.46	74.40	79.08	83.30	88.38
70	45.44	48.76	51.74	55.33	85.53	90.53	95.02	100.4
80	53.34	57.15	60.39	64.28	96.58	101.9	106.6	112.3

(背面仍有題目, 請繼續作答)

本試題是否可以使用計算機： 可使用， 不可使用（請命題老師勾選）

考試日期：0302，節次：3

The t Distribution



$$P(T \leq t) = \int_{-\infty}^t \frac{\Gamma((r+1)/2)}{\sqrt{\pi r} \Gamma(r/2) (1 + w^2/r)^{(r+1)/2}} dw$$

$$[P(T \leq -t) = 1 - P(T \leq t)]$$

$P(T \leq t)$

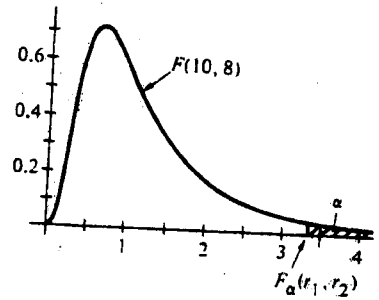
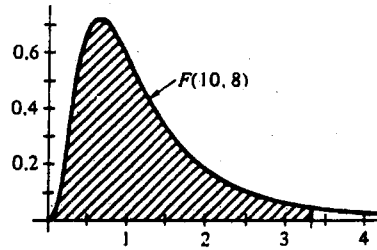
r	$P(T \leq t)$									
	0.60	0.75	0.90	0.95	0.975	0.99	0.995	$t_{0.05}(r)$	$t_{0.01}(r)$	$t_{0.005}(r)$
1	0.325	1.000	3.078	6.314	12.706	31.821	63.657			
2	0.289	0.816	1.886	2.920	4.303	6.965	9.925			
3	0.277	0.765	1.638	2.353	3.182	4.541	5.841			
4	0.271	0.741	1.533	2.132	2.776	3.747	4.604			
5	0.267	0.727	1.476	2.015	2.571	3.365	4.032			
6	0.265	0.718	1.440	1.943	2.447	3.143	3.707			
7	0.263	0.711	1.415	1.895	2.365	2.998	3.499			
8	0.262	0.706	1.397	1.860	2.306	2.896	3.355			
9	0.261	0.703	1.383	1.833	2.262	2.821	3.250			
10	0.260	0.700	1.372	1.812	2.228	2.764	3.169			
11	0.260	0.697	1.363	1.796	2.201	2.718	3.106			
12	0.259	0.695	1.356	1.782	2.179	2.681	3.055			
13	0.259	0.694	1.350	1.771	2.160	2.650	3.012			
14	0.258	0.692	1.345	1.761	2.145	2.624	2.997			
15	0.258	0.691	1.341	1.753	2.131	2.602	2.947			
16	0.258	0.690	1.337	1.746	2.120	2.583	2.921			
17	0.257	0.689	1.333	1.740	2.110	2.567	2.898			
18	0.257	0.688	1.330	1.734	2.101	2.552	2.878			
19	0.257	0.688	1.328	1.729	2.093	2.539	2.861			
20	0.257	0.687	1.325	1.725	2.086	2.528	2.845			
21	0.257	0.686	1.323	1.721	2.080	2.518	2.831			
22	0.256	0.686	1.321	1.717	2.074	2.508	2.819			
23	0.256	0.685	1.319	1.714	2.069	2.500	2.807			
24	0.256	0.685	1.318	1.711	2.064	2.492	2.797			
25	0.256	0.684	1.316	1.708	2.060	2.485	2.787			
26	0.256	0.684	1.315	1.706	2.056	2.479	2.779			
27	0.256	0.684	1.314	1.703	2.052	2.473	2.771			
28	0.256	0.683	1.313	1.701	2.048	2.467	2.763			
29	0.256	0.683	1.311	1.699	2.045	2.462	2.756			
30	0.256	0.683	1.310	1.697	2.042	2.457	2.750			
∞	0.253	0.674	1.282	1.645	1.960	2.326	2.576			

本試題是否可以使用計算機:  可使用,  不可使用 (請命題老師勾選)

考試日期: 0302, 節次: 3

The F Distribution

$$P(F \leq f) = \int_0^f \frac{\Gamma((r_1 + r_2)/2)(r_1/r_2)^{r_1/2} w^{r_1/2 - 1}}{\Gamma(r_1/2)\Gamma(r_2/2)(1 + r_1 w/r_2)^{(r_1 + r_2)/2}} dw$$



alpha	P(F ≤ f)	Den. d.f. r <sub>2</sub>	Numerator Degrees of Freedom, r <sub>1</sub>									
			1	2	3	4	5	6	7	8	9	10
0.05	0.95	1	161.4	199.5	215.7	224.6	230.2	234.0	236.8	238.9	240.5	241.9
0.025	0.975		647.79	799.50	864.16	899.58	921.85	937.11	948.22	956.66	963.28	968.63
0.01	0.99		4032	4999.5	5403	5625	5764	5859	5928	5981	6022	6056
0.05	0.95	2	18.51	19.00	19.16	19.25	19.30	19.33	19.35	19.37	19.38	19.40
0.025	0.975		38.51	39.00	39.17	39.25	39.30	39.33	39.36	39.37	39.39	39.40
0.01	0.99		98.50	99.00	99.17	99.25	99.30	99.33	99.36	99.37	99.39	99.40
0.05	0.95	3	10.13	9.55	9.28	9.12	9.01	8.94	8.89	8.85	8.81	8.79
0.025	0.975		17.44	16.04	15.44	15.10	14.88	14.73	14.62	14.54	14.47	14.42
0.01	0.99		34.12	30.82	29.46	28.71	28.24	27.91	27.67	27.49	27.35	27.23
0.05	0.95	4	7.71	6.94	6.59	6.39	6.26	6.16	6.09	6.04	6.00	5.96
0.025	0.975		12.22	10.65	9.98	9.60	9.36	9.20	9.07	8.98	8.90	8.84
0.01	0.99		21.20	18.00	16.69	15.98	15.52	15.21	14.98	14.80	14.66	14.55
0.05	0.95	5	6.61	5.79	5.41	5.19	5.05	4.95	4.88	4.82	4.77	4.74
0.025	0.975		10.01	8.43	7.76	7.39	7.15	6.98	6.85	6.76	6.68	6.62
0.01	0.99		16.26	13.27	12.06	11.39	10.97	10.67	10.46	10.29	10.16	10.05
0.05	0.95	6	5.99	5.14	4.76	4.53	4.39	4.28	4.21	4.15	4.10	4.06
0.025	0.975		8.81	7.26	6.60	6.23	5.99	5.82	5.70	5.60	5.52	5.46
0.01	0.99		13.75	10.92	9.78	9.15	8.75	8.47	8.26	8.10	7.98	7.87
0.05	0.95	7	5.59	4.74	4.35	4.12	3.97	3.87	3.79	3.73	3.68	3.64
0.025	0.975		8.07	6.54	5.89	5.52	5.29	5.12	4.99	4.90	4.82	4.76
0.01	0.99		12.25	9.55	8.45	7.85	7.46	7.19	6.99	6.84	6.72	6.62
0.05	0.95	8	5.32	4.46	4.07	3.84	3.69	3.58	3.50	3.44	3.39	3.35
0.025	0.975		7.57	6.06	5.42	5.05	4.82	4.65	4.53	4.43	4.36	4.30
0.01	0.99		11.26	8.65	7.59	7.01	6.63	6.37	6.18	6.03	5.91	5.81
0.05	0.95	9	5.12	4.26	3.86	3.63	3.48	3.37	3.29	3.23	3.18	3.14
0.025	0.975		7.21	5.71	5.08	4.72	4.48	4.32	4.20	4.10	4.03	3.96
0.01	0.99		10.56	8.02	6.99	6.42	6.06	5.80	5.61	5.47	5.35	5.26
0.05	0.95	10	4.96	4.10	3.71	3.48	3.33	3.22	3.14	3.07	3.02	2.98
0.025	0.975		6.94	5.46	4.83	4.47	4.24	4.07	3.95	3.85	3.78	3.72
0.01	0.99		10.04	7.56	6.55	5.99	5.64	5.39	5.20	5.06	4.94	4.85
0.05	0.95	12	4.75	3.89	3.49	3.26	3.11	3.00	2.91	2.85	2.80	2.75
0.025	0.975		6.55	5.10	4.47	4.12	3.89	3.73	3.61	3.51	3.44	3.37
0.01	0.99		9.33	6.93	5.95	5.41	5.06	4.82	4.64	4.50	4.39	4.30
0.05	0.95	15	4.54	3.68	3.29	3.06	2.90	2.79	2.71	2.64	2.59	2.54
0.025	0.975		6.20	4.77	4.15	3.80	3.58	3.41	3.29	3.20	3.12	3.06
0.01	0.99		8.68	6.36	5.42	4.89	4.56	4.32	4.14	4.00	3.89	3.80
0.05	0.95	20	4.35	3.49	3.10	2.87	2.71	2.60	2.51	2.45	2.39	2.35
0.025	0.975		5.87	4.46	3.86	3.51	3.29	3.13	3.01	2.91	2.84	2.77
0.01	0.99		8.10	5.85	4.94	4.43	4.10	3.87	3.70	3.56	3.46	3.37
0.05	0.95	24	4.26	3.40	3.01	2.78	2.62	2.51	2.42	2.36	2.30	2.25
0.025	0.975		5.72	4.32	3.72	3.38	3.15	2.99	2.87	2.78	2.70	2.64
0.01	0.99		7.82	5.61	4.72	4.22	3.90	3.67	3.50	3.36	3.26	3.17
0.05	0.95	30	4.17	3.32	2.92	2.69	2.53	2.42	2.33	2.27	2.21	2.16
0.025	0.975		5.57	4.18	3.59	3.25	3.03	2.87	2.75	2.65	2.57	2.51
0.01	0.99		7.56	5.39	4.51	4.02	3.70	3.47	3.30	3.17	3.07	2.98
0.05	0.95	40	4.08	3.23	2.84	2.61	2.45	2.34	2.25	2.18	2.12	2.08
0.025	0.975		5.42	4.05	3.46	3.13	2.90	2.74	2.62	2.53	2.45	2.39
0.01	0.99		7.31	5.18	4.31	3.83	3.51	3.29	3.12	2.99	2.89	2.80
0.05	0.95	60	4.00	3.15	2.76	2.53	2.37	2.25	2.17	2.10	2.04	1.99
0.025	0.975		5.29	3.93	3.34	3.01	2.79	2.63	2.51	2.41	2.33	2.27
0.01	0.99		7.08	4.98	4.13	3.65	3.34	3.12	2.95	2.82	2.72	2.63
0.05	0.95	120	3.92	3.07	2.68	2.45	2.29	2.17	2.09	2.02	1.96	1.91
0.025	0.975		5.15	3.80	3.23	2.89	2.67	2.52	2.39	2.30	2.22	2.16
0.01	0.99		6.85	4.79	3.95	3.48	3.17	2.96	2.79	2.66	2.56	2.47
0.05	0.95	∞	3.84	3.00	2.60	2.37	2.21	2.10	2.01	1.94	1.88	1.83
0.025	0.975		5.02	3.69	3.12	2.79	2.57	2.41	2.29	2.19	2.11	2.05
0.01	0.99		6.63	4.61	3.78	3.32	3.02	2.80	2.64	2.51	2.41	2.32

(背面仍有題目, 請繼續作答)

本試題是否可以使用計算機： 可使用， 不可使用 (請命題老師勾選)

考試日期：0302，節次：3

$\alpha$	$P(F \leq f)$	Den. d.f. $r_2$	Numerator Degrees of Freedom, $r_1$								
			12	15	20	24	30	40	60	120	$\infty$
0.05	0.95	1	243.9	245.9	248.0	249.1	250.1	251.1	252.2	253.3	254.3
0.025	0.975		976.71	984.87	993.10	997.25	1001.4	1005.6	1009.8	1014.0	1018.3
0.01	0.99		6106	6157	6209	6235	6261	6287	6313	6339	6366
0.05	0.95	2	19.41	19.43	19.45	19.45	19.46	19.47	19.48	19.49	19.50
0.025	0.975		39.42	39.43	39.45	39.46	39.47	39.47	39.48	39.49	39.50
0.01	0.99		99.42	99.43	99.45	99.46	99.47	99.47	99.48	99.49	99.50
0.05	0.95	3	8.74	8.70	8.66	8.64	8.62	8.59	8.57	8.55	8.53
0.025	0.975		14.34	14.25	14.17	14.12	14.08	14.04	13.99	13.95	13.90
0.01	0.99		27.05	26.87	26.69	26.60	26.50	26.41	26.32	26.22	26.13
0.05	0.95	4	5.91	5.86	5.80	5.77	5.75	5.72	5.69	5.66	5.63
0.025	0.975		8.75	8.66	8.56	8.51	8.46	8.41	8.36	8.31	8.26
0.01	0.99		14.37	14.20	14.02	13.93	13.84	13.75	13.65	13.56	13.46
0.05	0.95	5	4.68	4.62	4.56	4.53	4.50	4.46	4.43	4.40	4.36
0.025	0.975		6.52	6.43	6.33	6.28	6.23	6.18	6.12	6.07	6.02
0.01	0.99		9.89	9.72	9.55	9.47	9.38	9.29	9.20	9.11	9.02
0.05	0.95	6	4.00	3.94	3.87	3.84	3.81	3.77	3.74	3.70	3.67
0.025	0.975		5.37	5.27	5.17	5.12	5.07	5.01	4.96	4.90	4.85
0.01	0.99		7.72	7.56	7.40	7.31	7.23	7.14	7.06	6.97	6.88
0.05	0.95	7	3.57	3.51	3.41	3.41	3.38	3.34	3.30	3.27	3.23
0.025	0.975		4.67	4.57	4.47	4.42	4.36	4.31	4.25	4.20	4.14
0.01	0.99		6.47	6.31	6.16	6.07	5.99	5.91	5.82	5.74	5.65
0.05	0.95	8	3.28	3.22	3.15	3.12	3.08	3.04	3.01	2.97	2.93
0.025	0.975		4.20	4.10	4.00	3.95	3.89	3.84	3.78	3.73	3.67
0.01	0.99		5.67	5.52	5.36	5.28	5.20	5.12	5.03	4.95	4.86
0.05	0.95	9	3.07	3.01	2.94	2.90	2.86	2.83	2.79	2.75	2.71
0.025	0.975		3.87	3.77	3.67	3.61	3.56	3.51	3.45	3.39	3.33
0.01	0.99		5.11	4.96	4.81	4.73	4.65	4.57	4.48	4.40	4.31
0.05	0.95	10	2.91	2.85	2.77	2.74	2.70	2.66	2.62	2.58	2.54
0.025	0.975		3.62	3.52	3.42	3.37	3.31	3.26	3.20	3.14	3.08
0.01	0.99		4.71	4.56	4.41	4.33	4.25	4.17	4.08	4.00	3.91
0.05	0.95	12	2.69	2.62	2.54	2.51	2.47	2.43	2.38	2.34	2.30
0.025	0.975		3.28	3.18	3.07	3.02	2.96	2.91	2.85	2.79	2.72
0.01	0.99		4.16	4.01	3.86	3.78	3.70	3.62	3.54	3.45	3.36
0.05	0.95	15	2.48	2.40	2.33	2.29	2.25	2.20	2.16	2.11	2.07
0.025	0.975		2.96	2.86	2.76	2.70	2.64	2.59	2.52	2.46	2.40
0.01	0.99		3.67	3.52	3.37	3.29	3.21	3.13	3.05	2.96	2.87
0.05	0.95	20	2.28	2.20	2.12	2.08	2.04	1.99	1.95	1.90	1.84
0.025	0.975		2.68	2.57	2.46	2.41	2.35	2.29	2.22	2.16	2.09
0.01	0.99		3.23	3.09	2.94	2.86	2.78	2.69	2.61	2.52	2.42
0.05	0.95	24	2.18	2.11	2.03	1.98	1.94	1.89	1.84	1.79	1.73
0.025	0.975		2.54	2.44	2.33	2.27	2.21	2.15	2.08	2.01	1.94
0.01	0.99		3.03	2.89	2.74	2.66	2.58	2.49	2.40	2.31	2.21
0.05	0.95	30	2.09	2.01	1.93	1.89	1.84	1.79	1.74	1.68	1.62
0.025	0.975		2.41	2.31	2.20	2.14	2.07	2.01	1.94	1.87	1.79
0.01	0.99		2.84	2.70	2.55	2.47	2.39	2.30	2.21	2.11	2.01
0.05	0.95	40	2.00	1.92	1.84	1.79	1.74	1.69	1.64	1.58	1.51
0.025	0.975		2.29	2.18	2.07	2.01	1.94	1.88	1.80	1.72	1.64
0.01	0.99		2.66	2.52	2.37	2.29	2.20	2.11	2.02	1.92	1.80
0.05	0.95	60	1.92	1.84	1.75	1.70	1.65	1.59	1.53	1.47	1.39
0.025	0.975		2.17	2.06	1.94	1.88	1.82	1.74	1.67	1.58	1.48
0.01	0.99		2.50	2.35	2.20	2.12	2.03	1.94	1.84	1.73	1.60
0.05	0.95	120	1.83	1.75	1.66	1.61	1.55	1.50	1.43	1.35	1.25
0.025	0.975		2.05	1.95	1.82	1.76	1.69	1.61	1.53	1.43	1.31
0.01	0.99		2.34	2.19	2.03	1.95	1.86	1.76	1.66	1.53	1.38
0.05	0.95	$\infty$	1.75	1.67	1.57	1.52	1.46	1.39	1.32	1.22	1.00
0.025	0.975		1.94	1.83	1.71	1.64	1.57	1.48	1.39	1.27	1.00
0.01	0.99		2.18	2.04	1.88	1.79	1.70	1.59	1.47	1.32	1.00