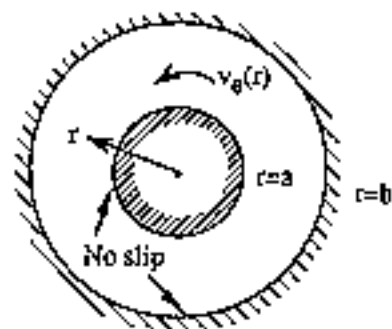
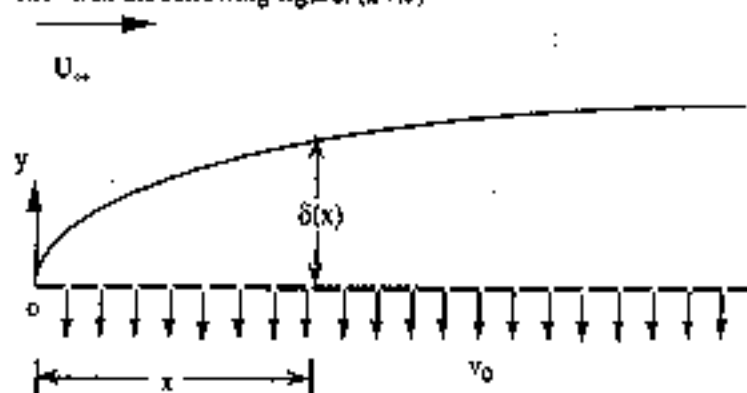


1. From the Navier-Stokes equations for incompressible flow in polar coordinates, find the most general case of purely circulating motion $v_r(r)$, $v_\theta = v_\theta(r)$, for flow with no slip between two fixed concentric cylinders, as in the following figure. (12%)

$$\frac{\partial v_r}{\partial t} + v_r \frac{\partial v_r}{\partial r} + \frac{v_\theta}{r} \frac{\partial v_r}{\partial \theta} + \frac{v_r v_\theta}{r} = -\frac{1}{\rho r} \frac{\partial p}{\partial \theta} + \nu \left[\frac{\partial}{\partial r} \left(\frac{1}{r} \frac{\partial (r v_\theta)}{\partial r} \right) + \frac{1}{r^2} \frac{\partial^2 v_\theta}{\partial \theta^2} + \frac{2}{r^2} \frac{\partial v_r}{\partial \theta} \right]$$



2. Consider the steady uniform flow over a flat plate, but let the plate be porous and subject to a uniform suction $v(x,0) = -v_0$, shown in the following figure. (24%)



- (a) Derive the integral momentum equation for this problem. (12%)

Hint: the equation is

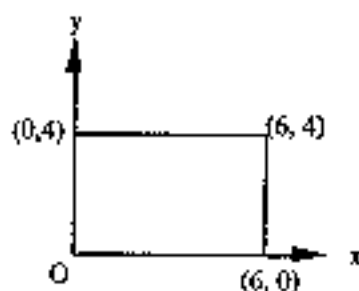
$$\frac{d}{dx} \int_0^{\delta} u(U_\infty - u) dy + v_0 U_\infty = \nu \left(\frac{\partial u}{\partial y} \right)_{y=0}$$

- (b) Solve the integral equation by assuming (8%)

$$\frac{u}{U_\infty} = a + b \left(\frac{y}{\delta} \right) + c \left(\frac{y}{\delta} \right)^2$$

- (c) As x approaches infinity, $\delta = ?$ (4%)

3. Given a velocity $\vec{v} = x\hat{i} - y\hat{j} + 8\hat{k}$. Evaluate the circulation about a rectangular path in the xy -plane as shown in the following figure. (10%)

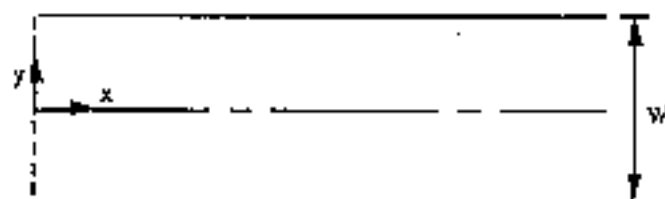


4. Prove that the equipotential lines are orthogonal to the streamlines. (8%)

5. Short answer (16%)

- (1) What kind of body can be neutrally buoyant and remain at rest at any point where it is immersed in the fluid?
- (2) What's the relationship between stream function and streamlines?
- (3) Why is the method of dimensional analysis useful?
- (4) There are two different kinds of fluid. How do you judge which one has the higher viscosity?

6. For a fully developed flow field between in a parallel-plate duct as shown in the following figure. Derive the expression of the velocity distribution in the duct, i.e., the distribution of u (the velocity component in the x-direction). (15%)



$$\frac{\partial u}{\partial t} + u \frac{\partial u}{\partial x} + v \frac{\partial u}{\partial y} = -\frac{1}{\rho} \frac{\partial p}{\partial x} + \nu \left[\frac{\partial^2 u}{\partial x^2} + \frac{\partial^2 u}{\partial y^2} \right]$$

7. A large tank of liquid has a horizontal tapered pipe of length L connected to it, as shown in the following figure. The tank is open to the atmosphere, and the surface of liquid in the tank is at a high h above the axis of the pipe. At any position x from the pipe entrance, the cross-sectional area A_x of the tapered pipe can be expressed by the following equation:

$$A_x = \frac{1}{b + cx}$$

where b and c are constants. The open end of the pipe is originally plugged. At time $t = 0$, the plug is pulled out of the open end, and liquid begins to flow under the action of gravity. Derive an expression relating the velocity V_x and time t after the plug is pulled out of the open end of the pipe. (15%)

Hint: for the streamline joining points O and e , the Bernoulli equation can be given by

$$\frac{p_o}{\rho} + gz_o + \frac{V_o^2}{2} = \frac{p_e}{\rho} + gz_e + \frac{V_e^2}{2} + \int_o^L \frac{\partial V}{\partial t} dx$$

